

The Laurence School, Louisa



SAMPLE QUESTION PAPER

2026-27

CLASS V

(STUDENTS SEEKING ADMISSION FOR CLASS V)



READING – 15 Marks

I.Comprehension

A lion was sleeping outside his den when a mouse, not knowing where he was going, ran over the mighty beast's nose and woke him. The lion clapped his paw upon the mouse and was about to make an end of him; but the mouse begged the lion to spare his life, and promised one day to pay him back for his kindness. So the lion let the mouse go.

Sometime later, the lion found himself caught in a hunter's trap. He tried to free himself but could not do so. His roars echoed through the forest, and the mouse came running to see what was happening. He set to work to nibble through the net that held the lion prisoner, and in a short time he was able to set him free. In this way he repaid the great beast's kindness.

A. Read the passage and answer the following questions: (10marks)

1. How did the lion wake up? (2)

2. What did the lion mean to do with the mouse? (2)

3. How did the mouse manage to make the lion set him free? (2)

4. How did the mouse know that the lion was caught? (2)

5. How did the mouse set the lion free? (2)



B. Match each word with the meaning it has in the passage: (1/2X4=2)

- | | | |
|-----------|---|----------|
| 1. den | a) a person that hunts animals for food and sport | () |
| 2. begged | b) take strong bites from | () |
| 3. hunter | c) a strong and urgent request | () |
| 4. nibble | d) shelter of a wild animal | () |

C. Make sentences with the following words: (3 marks)

a. promised: _____

b. great: _____

c. tried: _____

WRITING – 15 Marks

A. Write a letter to your friend describing your pet.(10 marks)

Address

Date _____

Dear _____



B. Write a short composition on ‘What would you like Santa Claus to gift you this Christmas? Why?’ (5 marks)

[illegible]



GRAMMAR – 20 Marks

I. Underline the Proper noun and circle the Common noun:

(5 marks)

- a. I met James at the post office.
- b. Kiran played with her sister.
- c. The house is in Delhi.
- d. London is an expensive city.
- e. Peter is my classmate.

II. Fill in the blanks with correct verb from the bracket:

(5 marks)

- a. I _____ (leave, left) school last year.
- b. He _____ (won, win) a prize in the competition.
- c. My aunts _____ (is, are) arriving from Kanpur today.
- d. My father _____ (go, goes) for a walk every morning.
- e. The dog _____ (growl, growls) at strangers.



III. Fill in the blanks with suitable adjectives from the box:
(5 marks)

naughty	neat	funny	wet	intelligent
---------	------	-------	-----	-------------

- a. The house was _____ and tidy.
- b. The _____ boy solved the sum before the others.
- c. Put the _____ clothes out to dry.
- d. At the circus, we enjoyed the show put up by the _____ clowns.
- e. The _____ puppy spilt the milk.

IV. Rewrite and punctuate the sentences using full stops, capitals, and question marks.
(5 marks)

- a. what day of the week is your favourite

- b. david and john went hiking in the mountains

- c. i am so excited to see my family for christmas

- d. did you enjoy rahul's birthday party

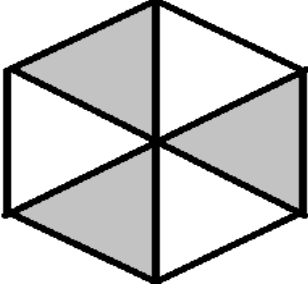
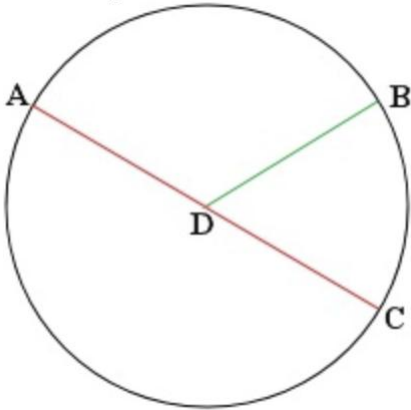
- e. what time does the bus arrive




General instructions:

- I. Attempt **all** the questions.
- II. Questions from 1 to 10 carry 2 mark each.
- III. Questions from 11 to 20 carry 3 marks each.

SECTION-A

1	What fraction is represented by the shaded part? 	2
2	Write down the missing numbers: 5463, _____, 5473, 5478, _____.	2
3	Draw a 3-sided shape having 1 right angle.	2
4	Measure and write the diameter of the given circle: 	2
5	What is the place value and value of 2 in 12,34,175?	2

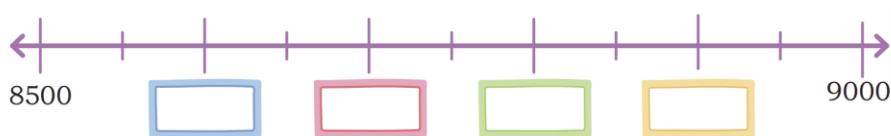


6	<p>Use the digits 5, 4, 0, 8 to build the greatest and smallest number without repeat the digits.</p> <p>Greatest : _____</p> <p>Smallest: _____</p>	2
7	<p>Divide the shapes into 4 equal parts/quarters by drawing two lines.</p> 	2
8	<p>Identify which of the following numbers are even and which are odd</p> <p>32 48 21 76 67 35 40 25 19 23</p> <p>Odd Numbers: _____</p> <p>Even Numbers: _____</p>	2
9	<p>Compare the following pairs of numbers using $<$ or $>$ sign</p> <p>a) 1235 <input type="text"/> 5321</p> <p>b) 9001 <input type="text"/> 8998</p>	2

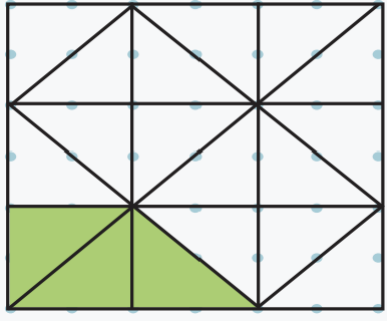
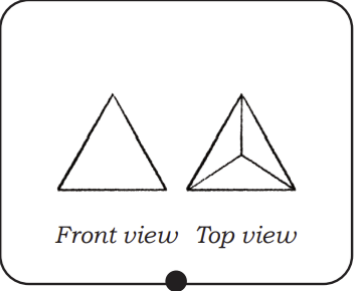


10	Which of these numbers lie between 3226 and 4226? Circle the correct answers. 4316 4236 3236 3216 4126 4216	2

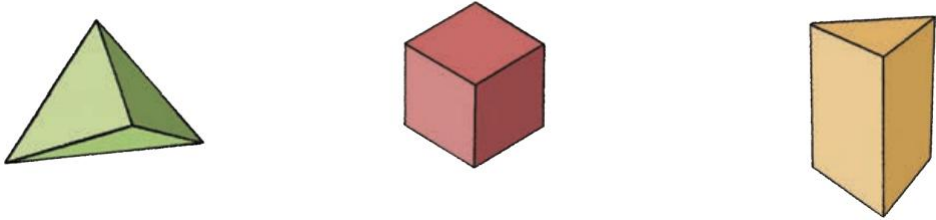

SECTION – B

11	How many pieces of $\frac{1}{6}$ cake would make a complete cake?	3
12	Draw picture of pencil box from the top.	3
13	There are 10 cookies. What fraction of cookies will each get if cookies are divided among 5 children?	3
14	Mark the following numbers on the number line below. a) 8679 b) 8990 c) 8923 	3



15	<p>Identify the fractions represented by the coloured parts in the given picture.</p> 	3
16	<p>Fill the blanks with digits 0–9 such that the numbers meet the condition.</p> <p>a) $6_ _ 8 > 653_$</p> <p>b) $7582 < 7_ 82$</p> <p>c) $_ 5 _ 1 < 6_ 4 _$</p>	3
17	<p>Identify and circle the shape for which front view and top view are given</p> 	3



		
18	<p>Find the Perimeter of the given shape if the distance between two dots is 1 cm.</p> 	3
19	<p>If 1 m = 100 cm, fill in the blanks:</p> <p>a) 4 m = _____ cm</p> <p>b) 1 m 40 cm = _____ cm</p> <p>c) $\frac{1}{2}$ m = _____ cm</p>	3



20

Look the following pattern .Fill the last one.

3

